



Noah's Ark Independent Primary School

Subject: Geography	Examiner: Matongo, N
Type: End of 3 rd Term Assmt.	Moderator: Rwizi, A
Date: 2 September 2019	Grade: 6
Marks: 50 Marks	Time: 1 hour

Name: _____

Instructions:

Answer ALL the questions in the spaces provided.

Write neatly and legibly

Carefully read all questions before answering

1. Use the word bank below to complete the following sentences.

Word Bank			
emergent	deforestation	lianas	adaptation
hibernate	precipitation	forestry	humid

1.1 Removing trees without planting new ones
_____ (1)

1.2 Plants with stems like ropes which hang from trees
_____ (1)

1.3 Trees that stick out above the rest
_____ (1)

1.4 Special features that suit the climate
_____ (1)

1.5 To sleep in winter months _____ (1)

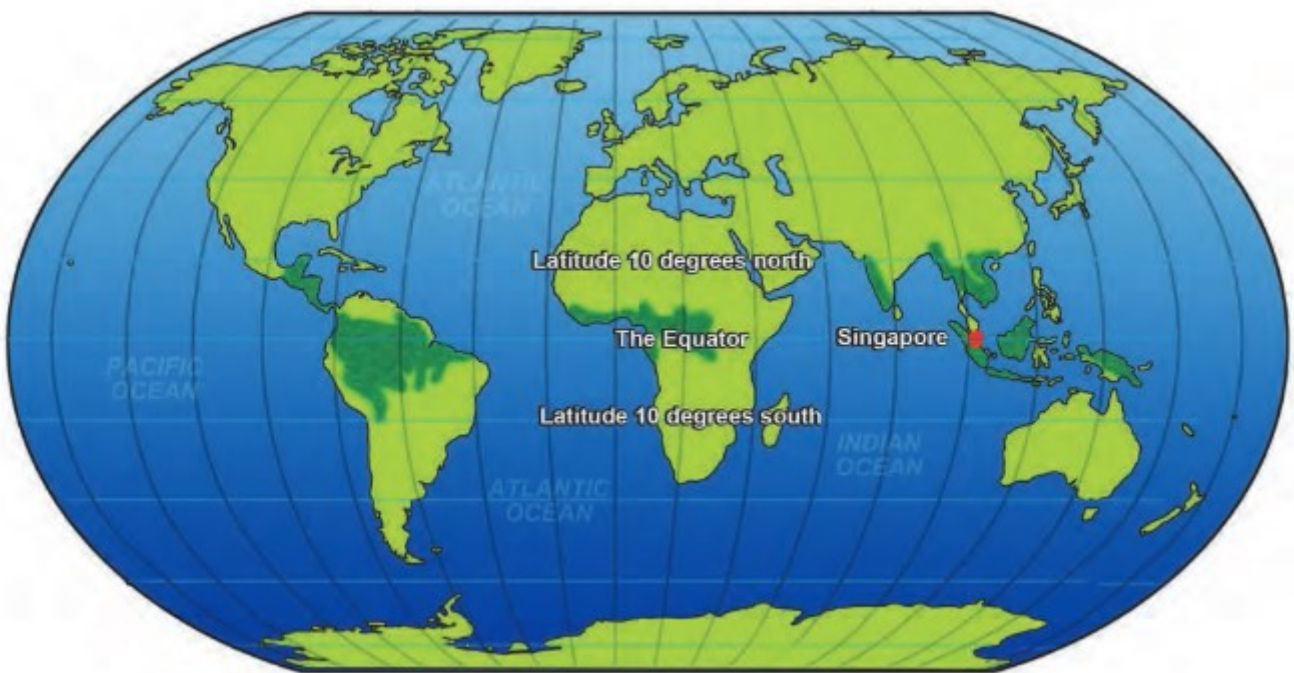
2. Complete the following sentences by filling in the missing words.

2.1 Places close to the equator are _____
than places close to the poles. (1)

2.2 Places close to the Arctic and Antarctic circle are _____ (1)

3. Differentiate between weather and climate. (4)

4. Study the following world map and answer the questions that follow.



4.1 Name three countries that have tropical rainforests. (3)

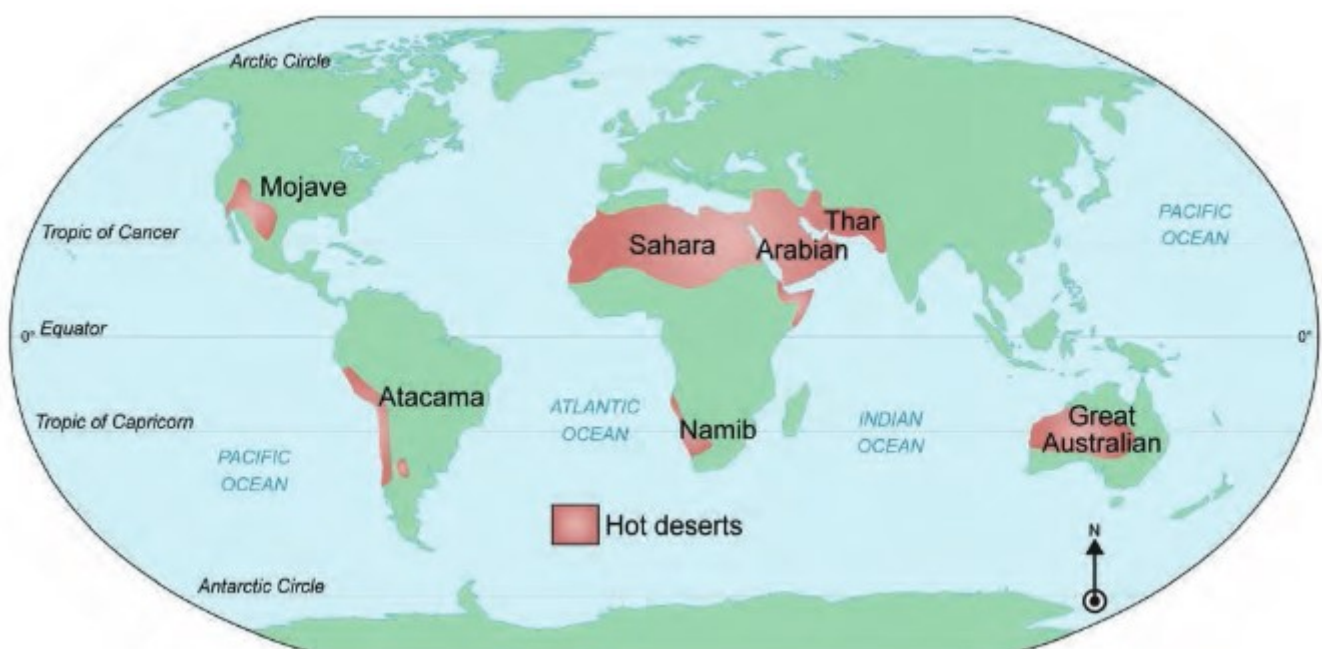
4.2 Describe the location in the world of the tropical rainforests. (3)

4.3 Describe the climate of the tropical rainforests. (2)

4.4 From the variety of vegetation found in the tropical rainforests distinguish the main kind of vegetation found in the rainforests. (1)

4.5 Almost one tenth of the amazon has been removed since 1970. Summarise giving about four reasons why there is much deforestation in the Amazon. (4)

5. Study the map below and answer the questions that follow.



5.1 Describe the location of hot deserts in the world. (3)

5.2 Which two hot deserts are found in Asia? (2)

5.3 Describe the climate of the hot desert. (2)

5.4 Choose one of the following plants found in the hot desert and explain how it has adapted to survive in a desert climate. (2)

- a. Joshua tree b. Cactus tree

5.5 Explain how animals live in the hot desert. (3)

6. Study the graph below and answer the questions that follow.

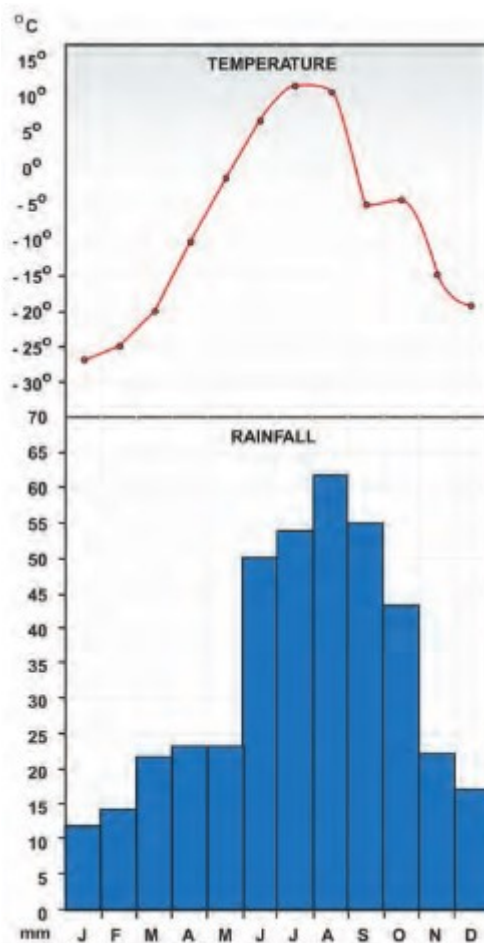
6.1 Which kind of forest is being represented by the graph?

6.2 What is the average yearly precipitation of Church Hill?

6.3 How does precipitation fall in this area mostly?

6.4 Look at the graph carefully and describe the climate of this area.

6.5 How do animals in this area survive the long winters? (3)



(4)

6.6 Group the following animals in the word bank below into animals of the coniferous forest and animals of the hot desert. (4)

Word Bank			
Rabbit	Arctic fox	Brown bear	Lizards

Animals of the coniferous forest	Animals of the hot desert

7. Give a brief summary of the things that attracted people to coniferous forests. (2)

_____ / 50 Marks